



Grade 2

OLYMPIAD 2023 - 24

MATHS

Total Questions: 35

Total Marks: 35

Time: 1hr

Set: A

Question: 1 of 35

QID: 19289

Marks: 1

What is the place value of 1 in 351?

- A. ones
- B. tens
- C. thousands
- D. hundreds

Question: 2 of 35

QID: 19259

Marks: 1

If there are 5 bags, and each bag has 8 marbles, how many marbles are there in total?

- A. 35
- B. 40
- C. 45
- D. 13

Question: 3 of 35






QID: 19284

Marks: 1

There are 12 birds sitting on a tree branch. 6 more birds join them. How many birds are on the branch in total?

- A. 12
- B. 6
- C. 18
- D. 20

Study the pictograph and find the total no of tomatoes and carrots present.

Tomato	
Capsicum	
Carrot	
Mushroom	
Potato	

A. 4

B. 10

C. 24

D. 6

Question: 5 of 35

QID: 19266

Marks: 1

What numbers are missing in this sequence: 5, 10, __, 20, __, 30?

A. 15,20

B. 20,25

C. 15,25

D. 25,35

Question: 6 of 35

QID: 19270

Marks: 1

Which shape has 4 sides and all sides of equal length?

A. Square

B. Rectangle

C. Circle

D. Pentagon

Question: 7 of 35

QID: 19278

Marks: 1

What is the sum of the first three natural numbers?

A. 1

B. 6

C. 2

D. 3

Question: 8 of 35

QID: 19265

Marks: 1

I have 4 vertices and 4 equal sides. What shape am I?

- A. Triangle
- B. Square
- C. Rectangle
- D. Circle

Question: 9 of 35

QID: 19292

Marks: 1

Which option is in ascending order?

- A. 7871, 7882, 7874, 7889
- B. 7871, 7889, 7874, 7882
- C. 7882, 7871, 7889, 7874
- D. 7871, 7874, 7882, 7889

Question: 10 of 35

QID: 19288

Marks: 1

How many sides does a Hexagon have?

- A. 4
- B. 5
- C. 6
- D. 7

Question: 11 of 35

QID: 19285

Marks: 1

1, 2, 4, 7, 11, _____, what number follows?

- A. 16
- B. 15
- C. 14
- D. 13

Question: 12 of 35

QID: 19286

Marks: 1

What is the sum of 90 and zero?

- A. 90
- B. 0
- C. 900
- D. 9

Question: 13 of 35

QID: 19279

Marks: 1

If you have a bag of apples that weighs 500 grams and a bag of oranges that weighs 250 grams, how much do they weigh together?

- A. 1000 grams
- B. 750 grams
- C. 150 grams
- D. 250 grams

Question: 14 of 35

QID: 19276

Marks: 1

Which one of the following numbers has 5 tens 6 ones ?

- A. 65
- B. 66
- C. 56
- D. 55

Question: 15 of 35

QID: 19293

Marks: 1

What is the product of 98765 and 0


- A. 98765
- B. 0
- C. 98000
- D. 80000

Which fruit is heavier ?



- A. Pineapple
- B. Pumpkin
- C. Both are same in weight
- D. Can't say

How many flowers are there in the given figure?



A. 11

C. 12

B. 13

D. 14

Sasha has 22 apples, she went apple picking and got 10 more. How many apples does Sasha have all together?


A. 23

C. 29

B. 32

D. 30

What fraction of circle is green ?



- A. $\frac{1}{4}$ B. $\frac{3}{4}$
 C. $\frac{2}{4}$ D. $\frac{4}{4}$

Which of the following shows the time in the evening?

- A. 3:00 PM B. 3:00 AM
 C. 6:00 PM D. 6:00 AM

Who is taller?








- A. Boy B. Giraffe
 C. Both have same height D. Can't say

If it's 3:30 PM now, how many minutes are there until 4:00 PM?

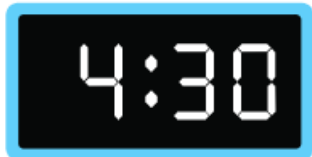
- A. 20minutes B. 30minutes
 C. 35minutes D. 25minutes

Andy interviews his classmates and made a list on how each of them comes to school. Here is what he found. How many students come to school by bus?

Bus	
Cycle	
Car	
On foot	
Rickshaw	

 A. 7 B. 8 C. 9 D. 6

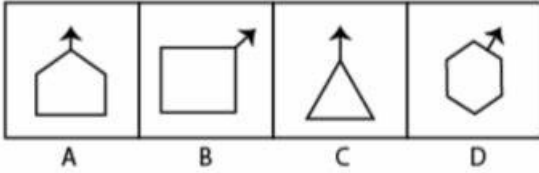
Dalton is helping his uncle in the garden this afternoon. The clock shows:

 A. 4:30 AM B. 4:30 PM

What is shown in this picture?

 A. Line B. Line Segment C. Ray D. Shape

Find the odd one out



A. A

B. B

C. C

D. D

Question: 31 of 35

QID: 19275

Marks: 1

Which of the following shapes is missing in the given figure?



A. Triangle

B. Diamond

C. Rectangle

D. Circle

Question: 32 of 35

QID: 19267

Marks: 1

Sara has 28 marbles, and she gives 13 marbles to her friend. How many marbles does Sara have left?


A. 41

B. 15

C. 12

D. 10

Count the number of cups shown in the image .



A. 10

B. 9

C. 8

D. 7

Question: 34 of 35

QID: 19268

Marks: 1

Arrange the numbers 25, 12, 33, 48, and 8 in ascending order

A. 33, 48, 12, 25, 8

B. 8, 12, 25, 33, 48

C. 48, 33, 25, 12, 8

D. 25,12,8,48,33

Question: 35 of 35

QID: 19280

Marks: 1

What is the next number in the pattern: 3, 6, 12, 24, ___?

A. 48

B. 25

C. 30

D. 26

— END OF QUESTION PAPER —